

姓名：鍾柏軒 (9)

成績：











班別：2 (A) / B

日期：22-11-2017













24/11

1. 每袋糖果有 8 粒，盧 sir 買了糖果 3 袋，共有糖果多少粒？

資料表：	思考圖：						
<table border="1"> <tr> <td>每袋 </td> <td>8 粒</td> </tr> <tr> <td></td> <td>3 袋</td> </tr> <tr> <td>共有 </td> <td>? 粒</td> </tr> </table>	每袋 	8 粒		3 袋	共有 	? 粒	
每袋 	8 粒						
	3 袋						
共有 	? 粒						
連加列式：	乘法列式：						
$8+8+8$	$8 \times 3$						

2. 陳 老師買了金魚 4 包，每包金魚有 7 條，她共買了金魚多少條？

資料表：	思考圖：						
<table border="1"> <tr> <td>每包 </td> <td>7 條</td> </tr> <tr> <td></td> <td>4 包</td> </tr> <tr> <td>共有 </td> <td>? 條</td> </tr> </table>	每包 	7 條		4 包	共有 	? 條	
每包 	7 條						
	4 包						
共有 	? 條						
連加列式：	乘法列式：						
$7+7+7+7$	$7 \times 4$						